

The background of the slide features a repeating pattern of watermelon slices and green leaves. The watermelon slices are red with black seeds and green rinds, while the leaves are various shades of green with detailed vein patterns. The pattern is set against a light, off-white background.

Describe, Order and Compare

Week 1

Ordering numbers

- Biggest to smallest -

Numbers 1 - 30

Let's count...

1	2	3	4	5	6	7	8	9	10
11	12	13	14	15	16	17	18	19	20
21	22	23	24	25	26	27	28	29	30

What does ordering numbers mean?

When we order numbers from **biggest** to **smallest** that means we find the biggest number and put it first and then we find the next biggest number and put that next.

Let's try an example...



Which is the **biggest** number?
Which number has the most dots?



Yes! Number 5!

It has the most dots!

Let's cross out 5 because we have used it already.

5

So 5 is first because it has the **MOST** dots and is the biggest number.
Which is the next number



Next up is number?

4! Yes well done!

How do we know this?

Yes! It has the most dots
left over!

5, 4







Next up is number?

3! Yes well done!

How do we know this?

Yes! It has the most dots
left over!

5, 4, 3



Next up is number?

2! Yes well done!

How do we know this?

Yes! It has the most dots left over!

5, 4, 3, 2



Next up is number?

!! Yes well done!

How do we know this?

Yes! It has the most dots
left over!

5, 4, 3, 2, 1



Now we have ordered our
numbers from biggest to
smallest!
Well Done!

5, 4, 3, 2, 1

10

1

15

25

30

Which number is the biggest number here?

Could it be number 1?

Could it be number 15?

No! There are much bigger numbers here.

Lets count to 30 ?

Did you get to 30?

So now which number do you think is the biggest?

10

1

15

25

30

1	2	3	4	5	6	7	8	9	10
11	12	13	14	15	16	17	18	19	20
21	22	23	24	25	26	27	28	29	30

Did you think it was 30?

You're very clever!

Number 30 is the last number on our number chart so we know it is the biggest!

1	2	3	4	5	6	7	8	9	10
11	12	13	14	15	16	17	18	19	20
21	22	23	24	25	26	27	28	29	30

Let's cross out 30 because we have used it
already

10

1

15

25

~~30~~

Let's write it down on the line.

30,

What's the next biggest number?

10

1

15

25

~~30~~

1	2	3	4	5	6	7	8	9	10
11	12	13	14	15	16	17	18	19	20
21	22	23	24	25	26	27	28	29	30

Yes! It's number 25!

What's the next biggest number?
25?

10

1

15

~~25~~

~~30~~

Let's write it down on the line.
And cross it out.

30, 25,

What's the next biggest number?

10

1

~~15~~

~~25~~

~~30~~

1	2	3	4	5	6	7	8	9	10
11	12	13	14	15	16	17	18	19	20
21	22	23	24	25	26	27	28	29	30

Yes! It's number 15!

What's the next biggest number?
15?

10

1

~~15~~

~~25~~

~~30~~

Let's write it down on the line.
And cross it out.

30, 25, 15

What's the next biggest number?

10

1

~~15~~

~~25~~

~~30~~

1	2	3	4	5	6	7	8	9	10
11	12	13	14	15	16	17	18	19	20
21	22	23	24	25	26	27	28	29	30

Yes! It's number 10!

What's the next biggest number?
10?

10

1

~~15~~

~~25~~

~~30~~

Let's write it down on the line.
And cross it out.

30, 25, 15, 10

What's the next biggest number?

~~10~~

1

~~15~~

~~25~~

~~30~~

1	2	3	4	5	6	7	8	9	10
11	12	13	14	15	16	17	18	19	20
21	22	23	24	25	26	27	28	29	30

Yes! It's number 1!

What's the next biggest number?
1?

~~10~~

~~1~~

~~15~~

~~25~~

~~30~~

Let's write it down on the line.
And cross it out.

30, 25, 15, 10, 1

Well done!
Let's try this in a worksheet...

Good luck!